



INDIAN SCHOOL AL WADI AL KABIR
DEPARTMENT OF MATHEMATICS (2023 – 2024)

TOPIC: NUMBER CONCEPTS (0 – 20)

WORKSHEET - 1

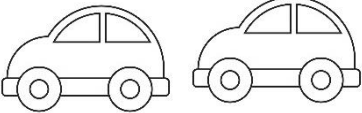

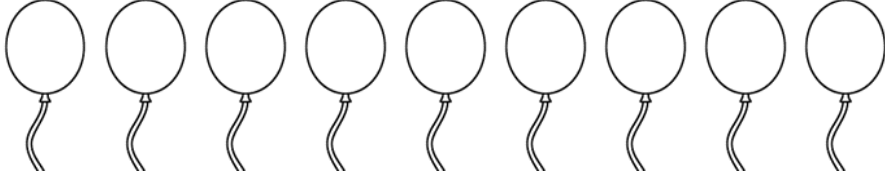

RESOURCE PERSON: MRS. HAMIN V

NAME: _____

SEC: _____

DATE: _____

Q1. Count the pictures and write the numeral.

a.		
b.		
c.		
d.		

Q2. Draw the values for the given numerals.

a.	5	
b.	10	
c.	14	

CHECKED BY: ACADEMIC COORDINATOR – CLASS - I

ISWK/DEPARTMENT OF MATHEMATICS /2023-2024